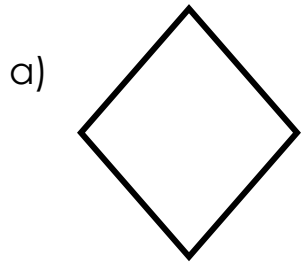
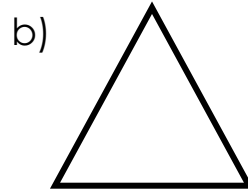


# Les figures planes et les solides


1. Écris le nom des **figures planes**.




\_\_\_\_\_



\_\_\_\_\_




\_\_\_\_\_

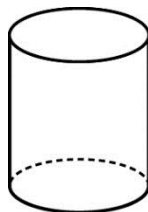


\_\_\_\_\_

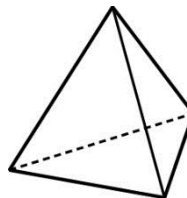
2. Relie chaque **solide** à son nom.



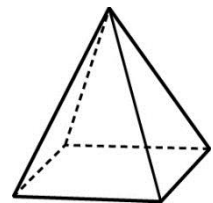
•



•



•



•

•

•

•

•

Pyramide à base carrée

Prisme à base rectangulaire

Pyramide à base triangulaire

Cylindre