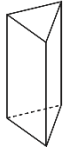



1. Associe chaque solide à son nom.

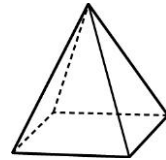
a)



b)



c)

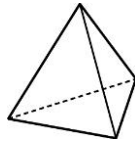


Pyramide à
base carrée

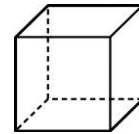
Prisme à base
triangulaire

Prisme à base
rectangulaire

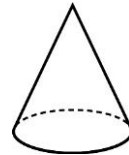
d)



e)



f)

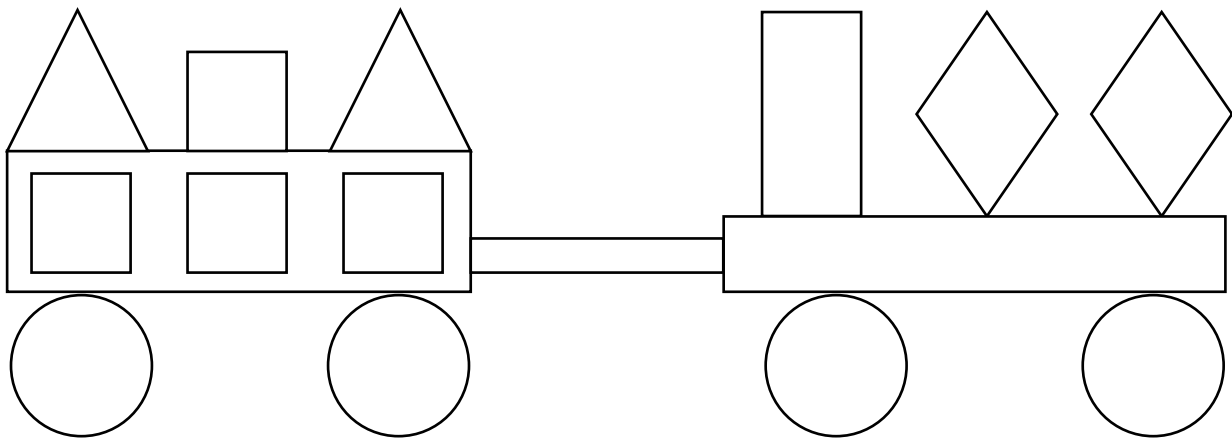


Cube

Cône

Pyramide à base
triangulaire

2. Regarde l'image suivante.



Combien y-a-t-il de triangles?

Combien y-a-t-il de losanges?

Combien y-a-t-il de carrés?

Combien y-a-t-il de rectangles?

Combien y-a-t-il de cercles?